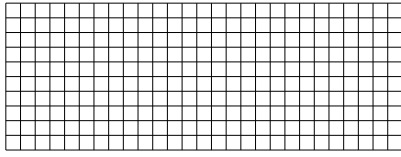





Use the array provided to solve each problem.


1) $10 \times 27 =$




2) $18 \times 10 =$




3) $10 \times 19 =$




4) $11 \times 10 =$



5) $10 \times 12 =$



6) $10 \times 14 =$



Answers

1. _____

2. _____

3. _____

4. _____

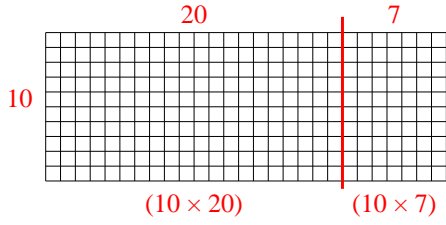
5. _____

6. _____

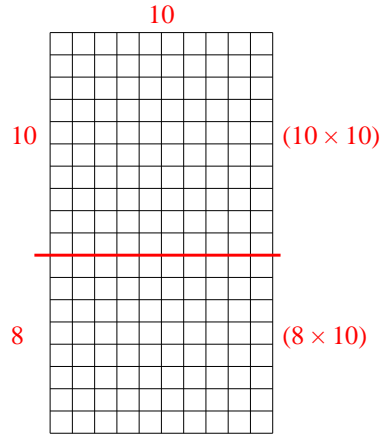


Use the array provided to solve each problem.

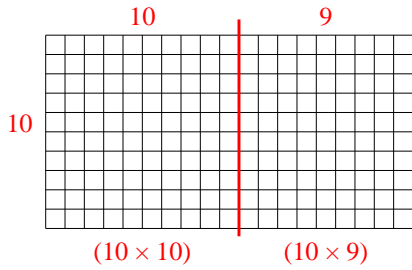
1) $10 \times 27 =$



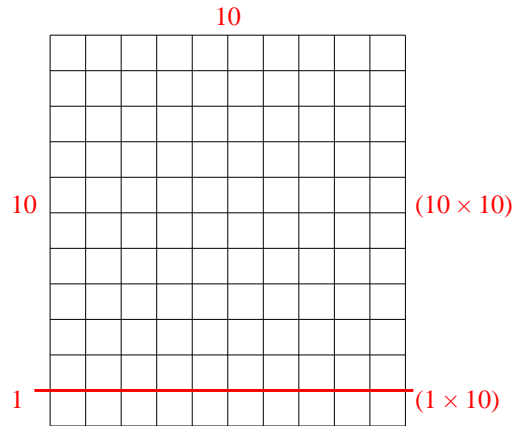
2) $18 \times 10 =$



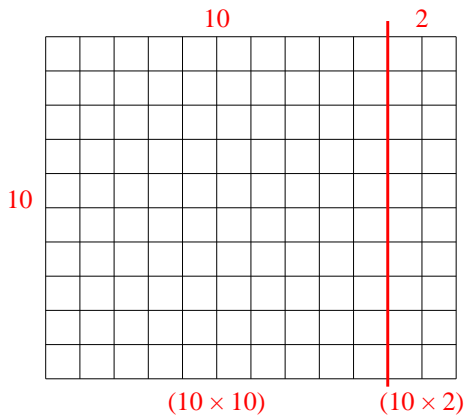
3) $10 \times 19 =$



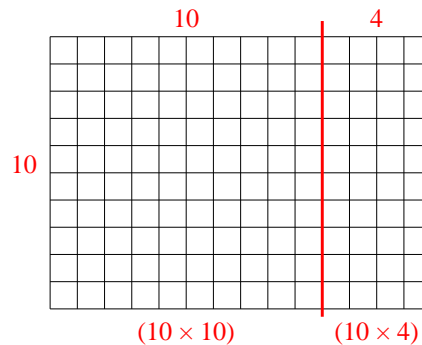
4) $11 \times 10 =$



5) $10 \times 12 =$



6) $10 \times 14 =$



Answers

1. 270
2. 180
3. 190
4. 110
5. 120
6. 140